

Get Free Geometry Chapter 10 Practice Test Part 2

This is likewise one of the factors by obtaining the soft documents of this **Geometry Chapter 10 Practice Test Part 2** by online. You might not require more become old to spend to go to the book establishment as capably as search for them. In some cases, you likewise reach not discover the broadcast Geometry Chapter 10 Practice Test Part 2 that you are looking for. It will no question squander the time.

However below, similar to you visit this web page, it will be correspondingly entirely easy to acquire as with ease as download guide Geometry Chapter 10 Practice Test Part 2

It will not allow many period as we notify before. You can attain it even if put it on something else at house and even in your workplace. thus easy! So, are you question? Just exercise just what we allow below as competently as review **Geometry Chapter 10 Practice Test Part 2** what you taking into consideration to read!

BFE - POWERS LIZETH








Geometry Chapter 10 Test Answer algebraic geometry wikipedia. answer key photo-synthesis vocabulary reveiw pdf download. chapter 111 subchapter c texas education agency. amazon com workbook grade 10 math with answer key. exploring beagle-bone - chapter 11 beaglebone with a rich. download free study material and test papers for jee main. basic geometry rules amp formulas video amp lesson ...

Geometry Chapter 10 Practice Test - vitaliti.integ.ro

Geometry Chapter 10 Practice Test Video

Geometry Chapter 10 Practice Test Part B.avi *Geometry Chapter 10 Practice Test Part C.avi* Geometry Chapter 10 Practice Test Part A.avi

Geometry Chapter 10 Practice Test Part D.avi *Geometry Review For Test on Chapter 10 on Circles H-F Final Exam Review: Geometry Honors Chapter 10 Circles (1).wmv* *Geometry Chapter 10 Review Geometry Chapter 10 Practice Test #1 4 Geometry Chapter 10 Test Review H-F Final Exam Review: Geometry Chapter 10.wmv* *Chapter 10 Review Everything About Circle Theorems - In 3 minutes!*

How to score good Marks in Maths | How to Score 100/100 in Maths |        Finding Arc Length of a Circle

Geometry Chapter 10 Section 6 Circles and Arcs *Circle Theorems (CXC CSEC and GCSE Math Revision) - SUBSCRIBE!*

Geometry - Circles - Chords, secants \u0026amp; tangents - measures, angles and arc lengths

Geometry 10.6 Secants, Tangents, and Angle Measures *Inscribed and Central*

Angles Chapter 10 review worksheets (others) 10-1 Areas of Parallelograms and Triangles 2014 Chapter 10 Quiz Review Geometry Chapter 10 Test review Geometry - Chapter 10 Review (Circles)







"Practical Geometry" Chapter 10 - Introduction - NCERT Class 7th Maths Solutions *Triangle | Triangles Class 10 | Class 10 Maths Chapter 6 | Full Chapter/Introduction/Theorem | Math 8th Class Math, Ch 10 - Demonstrative Geometry Exercise 10.1 Question 1 (1 to 3) - 8th Class Maths Pythagoras Theorem Class 10th Maharashtra Board New Syllabus Part 2 | Practice Set 2.1* Introduction - Visualising Solid Shapes - Chapter 10 - NCERT Class 8th Maths

Geometry Chapter 10 Practice Test

Geometry Chapter 10 Practice Test Video

Geometry Chapter 10 Practice Test Part B.avi *Geometry Chapter 10 Practice Test Part C.avi* Geometry Chapter 10 Practice Test Part A.avi

Geometry Chapter 10 Practice Test Part D.avi *Geometry Review For Test on Chapter 10 on Circles H-F Final Exam Review: Geometry Honors Chapter 10 Circles (1).wmv* *Geometry Chapter 10 Review Geometry Chapter 10 Practice Test #1 4 Geometry Chapter 10 Test Review H-F Final Exam Review: Geometry Chapter 10.wmv* *Chapter 10 Review Everything About Circle Theorems - In 3 minutes!*

How to score good Marks in Maths | How to Score 100/100 in Maths |       Finding Arc Length of a Circle

Geometry Chapter 10 Section 6 Circles and Arcs *Circle Theorems (CXC CSEC and GCSE Math Revision) - SUBSCRIBE!*

Geometry - Circles - Chords, secants

\u0026amp; tangents - measures, angles and arc lengths

Geometry 10.6 Secants, Tangents, and Angle Measures *Inscribed and Central Angles Chapter 10 review worksheets (others) 10-1 Areas of Parallelograms and Triangles 2014 Chapter 10 Quiz Review Geometry Chapter 10 Test review Geometry - Chapter 10 Review (Circles)*

"Practical Geometry" Chapter 10 - Introduction - NCERT Class 7th Maths Solutions *Triangle | Triangles Class 10 | Class 10 Maths Chapter 6 | Full Chapter/Introduction/Theorem | Math 8th Class Math, Ch 10 - Demonstrative Geometry Exercise 10.1 Question 1 (1 to 3) - 8th Class Maths Pythagoras Theorem Class 10th Maharashtra Board New Syllabus Part 2 | Practice Set 2.1* Introduction - Visualising Solid Shapes - Chapter 10 - NCERT Class 8th Maths

Geometry Chapter 10 Practice Test geometry-chapter-10-practice-test 1/5 Downloaded from www.uppercasing.com on October 24, 2020 by guest [Books] Geometry Chapter 10 Practice Test Thank you for reading geometry chapter 10 practice test. Maybe you have knowledge that, people have search numerous times for their favorite books like this geometry chapter 10 practice test, but end up in infectious downloads. Rather than reading a ...

Geometry Chapter 10 Practice Test | www.uppercasing Chapter 10 Practice Test For #1 and #2, choose the best answer. 1. Which statement is true? A A central angle is smaller than an inscribed angle with the same end points. C An inscribed angle that has the same endpoints as the diameter is always 90°. B Two inscribed angles are never equal in size. D If a bisector of a chord passes through the centre, the

bisector is not perpendicular to the ...

Chapter 10 Practice Test - Ms. Rae
Glencoe Geometry Chapter 10: Circles
Chapter Exam Take this practice test to
check your existing knowledge of the
course material. We'll review your answers
and create a Test Prep Plan for you ...

Glencoe Geometry Chapter 10: Circles -
Practice Test ...

File Type PDF Geometry Chapter 10
Practice Test Geometry Test Practice -
ClassZone Geometry Practice Test,
Geometry Practice Exam. Test your skills
with this plane geometry practice exam.
Whether you are studying for a school
exam or just looking to challenge your
geometry skills, this test will help you
assess your knowledge. Free Geometry
Practice Test from Tests.com Learn high
school ...

Geometry Chapter 10 Practice Test -
code.gymeyes.com

As this geometry chapter 10 practice test,
it ends up innate one of the favored books
geometry chapter 10 practice test
collections that we have. This is why you
remain in the best website to look the
unbelievable books to have. You can
search for a specific title or browse by
genre (books in the same genre are
gathered together in bookshelves). It's a
shame that fiction and non-fiction aren ...

Geometry Chapter 10 Practice Test -
coinify.digix.io

Prentice Hall Geometry Chapter 10: Area -
Practice Test ... I did about 8 problems on
here...some of the most requested from
the review practice test. ... Geometry
Review For Test on Chapter 10 on Circles -
Duration: 12:30. Mrmathblog
Recommended for you. Geometry Review
For Test on Chapter 10 on Circles
Geometry IXL offers hundreds of Geometry
skills to explore and learn! Not sure where
to ...

Geometry Chapter 10 Practice Test -
wakati.co

geometry chapter 10 practice test, but
end up in harmful downloads. Rather than
enjoying a fine book in the same way as a
mug of coffee in the afternoon, then again
they juggled in the same way as some
harmful virus inside their computer.
geometry chapter 10 practice test is

within reach in our digital library an online
permission to it is set as public hence you
can download it instantly. Our ...

Geometry Chapter 10 Practice Test -
cable.vanhensy.com

As this geometry chapter 10 practice test,
it ends stirring physical one of the favored
ebook geometry chapter 10 practice test
collections that we have. This is why you
remain in the best website to see the
incredible ebook to have. You can search
for a specific title or browse by genre
(books in the same genre are gathered
together in bookshelves). It's a shame that
fiction and non-fiction ...

Geometry Chapter 10 Practice Test
File Type PDF Geometry Chapter 10

Practice Test Geometry Chapter 10
Practice Test Prentice Hall Geometry
Chapter 10: Area - Practice Test ...
Geometry Chapter 1 Practice Test -
MAFIADOC.COM Geometry - Chapter 10
Practice Test Part 2 Chapter 10 Practice
Test - Ms. Rae Reviews and Answer Keys |
geometry Geometry Chapter 10 Test
review Geometry - Mr. Schumann's
Website Free Geometry Practice ...

Geometry Chapter 10 Practice Test -
vitaliti.integ.ro

Geometry Chapter 10 Test Answer
algebraic geometry wikipedia. answer key
photosynthesis vocabulary reveiw pdf
download. chapter 111 subchapter c texas
education agency. amazon com workbook
grade 10 math with answer key. exploring
beaglebone - chapter 11 beaglebone with
a rich. download free study material and
test papers for jee main. basic geometry
rules amp formulas video amp lesson ...

Geometry Chapter 10 Test Answer
Geometry Chapter 10 Test - Displaying top
8 worksheets found for this concept..

Some of the worksheets for this concept
are Chapter 10 resource masters, Chapter
10 work 1 name honors accelerated
geometry hour, Geometry test 1, Chapter
10 resource masters, Chapter 1 test
review, Geometry unit 1 workbook,
Geometry, Geometry chapter 3 notes
practice work.

Geometry Chapter 10 Test Worksheets -
Kiddy Math

Glencoe Geometry Chapter 10: Circles -
Practice Test ... Chapter 10 Practice Test

Answers - MS. JOHNSON Get Free Glencoe
Geometry Answer Key Chapter 10
geometry chapter 8 test, form 2c answer
key <p>They may fall asleep in class, or
they are hyperactive and struggle to just
sit still in one place. Children's music is a
great teaching tool. Children's early
experiences - the bonds they ...

Geometry Chapter 10 Test Answers

Glencoe Geometry 11 Chapter 11 Test,
Form 2B (continued) 9. 10 3 skills practice
arcs and chords answers page 555.
glencoe geometry chapter 10 test form 2d
answers. These materials include
worksheets, extensions, and assessment
options. Any time you have to have
guidance on solving systems of equations
as well as trigonometry, Solve-
variable.com is simply the perfect site to
have a look at ...

glencoe geometry chapter 1 answers - St.
Omer

Geometry EOC Practice Test #1 Multiple
Choice Identify the choice that best
completes the statement or answers the
question. ____ 1. Write a conditional
statement from the following statement: A
horse has 4 legs. a. If it has 4 legs, then it
is a horse. b. Every horse has 4 legs. c. If it
is a horse, then it has 4 legs. d. It has 4
legs and it ...

Geometry EOC Practice Test #1 - Ken
Campbell

Online Library Geometry Chapter 12
Practice Test Geometry Chapter 12
Practice Test When people should go to
the ebook stores, search introduction by
shop, shelf by shelf, it is in reality
problematic. This is why we present the
ebook compilations in this website. It will
definitely ease you to see guide geometry
chapter 12 practice test as you such as. By
searching the title, publisher, or ...

Geometry Chapter 12 Practice Test -
code.gymeyes.com

HESI A2 Vocabulary Practice Test
2019-2020; PSAT Writing and Language
Practice Test 4 Free Sample Quiz Online;
PSAT Writing and Language Test 3
Question Answer; PSAT Writing and
Language Test 2 (New PSAT/NMSQT and
PSAT 10 Exam) PSAT Writing and
Language Practice Test 2020 (New
PSAT/NMSQT and PSAT 10) Free Practice
Test 2020

Geometry Practice Test & Study Guide 2020

We give geometry chapter 10 practice test part 2 and numerous book collections from fictions to scientific research in any way. along with them is this geometry chapter 10 practice test part 2 that can be your partner. You can search for a specific title or browse by genre (books in the same genre are gathered together in bookshelves). It's a shame that fiction and non-fiction aren't ...

Geometry Chapter 10 Practice Test Part 2 Read Book Geometry Chapter 10 Practice Test puffin story books, 365 days of wonder, a guide to microsoft excel 2013 for scientists and engineers bernard liengme, a course in item response theory and modeling with stata, 50 tons de vermelho e outros contos muito incorretos portuguese edition, 802 11ac a survival guide, 4efte manual, a guide to sql standard, 7th grade civics eoc Page 7/9. Read ...

Geometry Chapter 10 Practice Test - Wiring Library

Read Free Geometry Chapter 10 Practice Test Geometry Chapter 10 Practice Test This is likewise one of the factors by obtaining the soft documents of this geometry chapter 10 practice test by online. You might not require more period to spend to go to the ebook commencement as without difficulty as search for them. In some cases, you likewise pull off not discover the revelation geometry ...

Geometry Chapter 10 Practice Test - dev.destinystatus.com

Geometry Chapter 10 Area Practice Test April 25th, 2018 - Test and improve your knowledge of Prentice Hall Geometry Chapter 10 Area with fun multiple choice exams you can take online with Study com' 'PRENTICE HALL GOLD GEOMETRY 10 2 PRACTICE FORM G SILOOO COM APRIL 26TH, 2018 - PRENTICE HALL 10 3 PRACTICE PROBLEMS GEOMETRY FILE TYPE PDF 2 THIS PDF BOOK INCLUDE PRENTICE HALL GEOMETRY 4 6 ...

Geometry Chapter 10 Practice Test - wakati.co

HESI A2 Vocabulary Practice Test 2019-2020; PSAT Writing and Language

Practice Test 4 Free Sample Quiz Online; PSAT Writing and Language Test 3 Question Answer; PSAT Writing and Language Test 2 (New PSAT/NMSQT and PSAT 10 Exam) PSAT Writing and Language Practice Test 2020 (New PSAT/NMSQT and PSAT 10) Free Practice Test 2020

File Type PDF Geometry Chapter 10 Practice Test Geometry Test Practice - Class-Zone Geometry Practice Test, Geometry Practice Exam. Test your skills with this plane geometry practice exam. Whether you are studying for a school exam or just looking to challenge your geometry skills, this test will help you assess your knowledge. Free Geometry Practice Test from Tests.com Learn high school ...

Geometry Chapter 10 Practice Test - Wiring Library

Geometry Chapter 10 Practice Test - code.gymeyes.com

Geometry Chapter 10 Practice Test - cable.vanhensy.com

Chapter 10 Practice Test For #1 and #2, choose the best answer. 1. Which statement is true? A A central angle is smaller than an inscribed angle with the same end points. C An inscribed angle that has the same endpoints as the diameter is always 90° . B Two inscribed angles are never equal in size. D If a bisector of a chord passes through the centre, the bisector is not perpendicular to the ...

We give geometry chapter 10 practice test part 2 and numerous book collections from fictions to scientific research in any way. along with them is this geometry chapter 10 practice test part 2 that can be your partner. You can search for a specific title or browse by genre (books in the same genre are gathered together in bookshelves). It's a shame that fiction and non-fiction aren't ...

Geometry Chapter 10 Practice Test Part 2

Prentice Hall Geometry Chapter 10: Area - Practice Test ... I did about 8 problems on here...some of the most requested from the review practice test. ... Geometry Review For Test on Chapter 10 on Circles - Duration: 12:30. Mrmathblog Recommended for you. Geometry Review For Test on Chapter 10 on Circles Geometry IXL offers hundreds of Geometry skills to explore and learn! Not sure where to ...

geometry-chapter-10-practice-test 1/5 Downloaded from www.uppercasing.com on October 24, 2020 by guest [Books] Geometry Chapter 10 Practice Test Thank you for reading geometry chapter 10

practice test. Maybe you have knowledge that, people have search numerous times for their favorite books like this geometry chapter 10 practice test, but end up in infectious downloads. Rather than reading a ...

Geometry Chapter 10 Practice Test - coinify.digix.io

Glencoe Geometry Chapter 10: Circles - Practice Test ... Chapter 10 Practice Test Answers - MS. JOHNSON Get Free Glencoe Geometry Answer Key Chapter 10 geometry chapter 8 test, form 2c answer key <p>They may fall asleep in class, or they are hyperactive and struggle to just sit still in one place. Children's music is a great teaching tool. Children's early experiences - the bonds they ... Glencoe Geometry Chapter 10: Circles Chapter Exam Take this practice test to check your existing knowledge of the course material. We'll review your answers and create a Test Prep Plan for you ...

Geometry Chapter 10 Test Worksheets - Kiddy Math

Online Library Geometry Chapter 12 Practice Test Geometry Chapter 12 Practice Test When people should go to the ebook stores, search introduction by shop, shelf by shelf, it is in reality problematic. This is why we present the ebook compilations in this website. It will definitely ease you to see guide geometry chapter 12 practice test as you such as. By searching the title, publisher, or ... As this geometry chapter 10 practice test, it ends up innate one of the favored books geometry chapter 10 practice test collections that we have. This is why you remain in the best website to look the unbelievable books to have. You can search for a specific title or browse by genre (books in the same genre are gathered together in bookshelves). It's a shame that fiction and non-fiction aren't ...

Geometry Chapter 10 Practice Test | www.uppercasing

Geometry EOC Practice Test #1 - Ken Campbell

Glencoe Geometry 11 Chapter 11 Test, Form 2B (continued) 9. 10 3 skills practice arcs and chords answers page 555. glencoe geometry chapter 10 test form 2d answers. These materials include worksheets, extensions, and assessment options. Any time you have to have guidance on solving systems of equations as well as trigonometry, Solve-variable.com is simply the perfect site to

have a look at ...

Geometry Chapter 10 Practice Test - dev.destinystatus.com

As this geometry chapter 10 practice test, it ends stirring physical one of the favored ebook geometry chapter 10 practice test collections that we have. This is why you remain in the best website to see the incredible ebook to have. You can search for a specific title or browse by genre (books in the same genre are gathered together in bookshelves). It's a shame that fiction and non-fiction ...

glencoe geometry chapter 1 answers - St. Omer

Geometry Practice Test & Study Guide 2020

Geometry Chapter 10 Test Answer
Geometry EOC Practice Test #1 Multiple Choice Identify the choice that best completes the statement or answers the question. ____ 1. Write a conditional statement from the following statement: A horse has 4 legs. a. If it has 4 legs, then it is a horse. b. Every horse has 4 legs. c. If it is a horse, then it has 4 legs. d. It has 4 legs and it ...

Geometry Chapter 10 Test - Displaying top 8 worksheets found for this concept.. Some of the worksheets for this concept

are Chapter 10 resource masters, Chapter 10 work 1 name honors accelerated geometry hour, Geometry test 1, Chapter 10 resource masters, Chapter 1 test review, Geometry unit 1 workbook, Geometry, Geometry chapter 3 notes practice work.

Geometry Chapter 10 Practice Test
Read Book Geometry Chapter 10 Practice Test puffin story books, 365 days of wonder, a guide to microsoft excel 2013 for scientists and engineers bernard liengme, a course in item response theory and modeling with stata, 50 tons de vermelho e outros contos muito incorretos portuguese edition, 802 11ac a survival guide, 4efte manual, a guide to sql standard, 7th grade civics eoc Page 7/9. Read ...

geometry chapter 10 practice test, but end up in harmful downloads. Rather than enjoying a fine book in the same way as a mug of coffee in the afternoon, then again they juggled in the same way as some harmful virus inside their computer. geometry chapter 10 practice test is within reach in our digital library an online permission to it is set as public hence you can download it instantly. Our ...

Read Free Geometry Chapter 10 Practice Test
Geometry Chapter 10 Practice Test This is likewise one of the factors by obtaining the soft documents of this geometry chapter 10 practice test by online. You might not require more period to spend to

go to the ebook commencement as without difficulty as search for them. In some cases, you likewise pull off not discover the revelation geometry ...

Geometry Chapter 12 Practice Test - code.gymeyes.com

Glencoe Geometry Chapter 10: Circles - Practice Test ...

Geometry Chapter 10 Test Answers
File Type PDF Geometry Chapter 10 Practice Test
Geometry Chapter 10 Practice Test Prentice Hall Geometry Chapter 10: Area - Practice Test ...
Geometry Chapter 1 Practice Test - MAFIADOC.COM
Geometry - Chapter 10 Practice Test Part 2
Chapter 10 Practice Test - Ms. Rae Reviews and Answer Keys | geometry
Geometry Chapter 10 Test review
Geometry - Mr. Schumann's Website
Free Geometry Practice ...

Chapter 10 Practice Test - Ms. Rae
Geometry Chapter 10 Area Practice Test
April 25th, 2018 - Test and improve your knowledge of Prentice Hall Geometry Chapter 10 Area with fun multiple choice exams you can take online with Study com' 'PRENTICE HALL GOLD GEOMETRY 10 2 PRACTICE FORM G SILOOO COM APRIL 26TH, 2018 - PRENTICE HALL 10 3 PRACTICE PROBLEMS GEOMETRY FILE TYPE PDF 2 THIS PDF BOOK INCLUDE PRENTICE HALL GEOMETRY 4 6 ...